



Sanskriti KMV SCHOOL

Summer Break Assignments (2026-27)

Grade-III

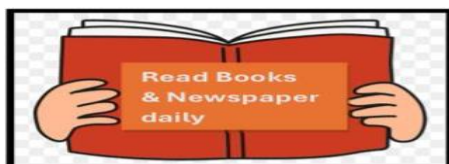
"Summer is the perfect time to explore, dream, and discover new wonders."

Dear Parents

Its summer time again. Time for strengthening family bond, tying threads of family tree, sharing joys and having a good time together. It is time for relaxation and enjoyment. As it is important to rest and enjoy, it is also important to continue to learn. Let vacation time be a doorway to self-dependence (small things that a child can do). Let the child take the lead and use his/her imagination, creativity, and knowledge to do the assigned task. The role of the parent is to be a facilitator and guide to steer the child in the right direction. Here you will find few funfilled activity based tasks to keep your brain buzzing while you relax and recharge. Let's make this vacation both memorable and meaningful!

Here are few points that need to be taken into consideration:

- Students should complete their Holidays Homework and submit it positively post vacation. It should be handed over to the Grade-Incharge in a single clear folder labelled properly with student's name, father's name, class and section.
- Follow regular Fitness Regime and maintain a balanced diet.
- Assign small household responsibilities to help them become independent.
- Spend quality time with the grandparents and reduce the screen time.
- Remember to capture the fun moments while engaging in different activities ,places visited, special days enjoyed, with the photograph with you.



Looking forward for a delightful fun filled time ahead!

Happy Holidays!

ENGLISH

Theme: "Fun with English"

1. Reading Activity My Reading Corner

Read the story 'Ranbir's terrible teeth' from Studio book -1 .

Write:

* Name of the story _____

* Favourite character _____

* 5 new words with meanings _____

* Moral of the story _____

Draw your favourite scene on A4 sheet.

2. Read the passage and answer the questions.

A Visit to the Zoo

Last Saturday, Meera went to the zoo with her parents and younger brother. The weather was sunny and pleasant. They saw many animals such as lions, elephants, monkeys, zebras, and giraffes. Meera liked the monkeys the most because they were jumping from one tree to another and making funny faces. Her brother enjoyed watching the elephants spray water with their trunks. The family also visited the bird section where they saw colorful parrots and peacocks. After walking around the zoo, they sat in the garden and ate sandwiches and juice. Before leaving, Meera bought a small toy elephant from the gift shop. Everyone felt happy and tired after the fun trip.

Answer the Questions

- i. Who went to the zoo with Meera?
- ii. Which animals did Meera like the most?
- iii. Multiple Choice Questions (MCQs)

What was the weather like?

- a) Rainy
- b) Sunny and pleasant
- c) Windy

What did Meera buy before leaving?

- a) A toy monkey
- b) A toy elephant
- c) A kite

iv. True or False

- a. Meera's brother liked the elephants. _____
- b. The family ate pizza at the zoo. _____

v. Complete the Statements.

- a. The family saw colourful parrots and _____.
- b. After visiting the zoo, everyone felt happy and _____.

3. Picture Composition

Paste or draw one picture and write 6–8 sentences about it.

Suggested topics:

* Park Scene, Birthday Party, Rainy Day, Picnic Scene.

4. Speaking Activity :- Speak with Confidence

Practice speaking in English for 1 minute daily with your parents / grandparents/or friends .

Choose any one topic and speak for 1 minute.

Topics:

My Best Friend

My School

My Favourite Cartoon

Summer Season

Practice with correct pronunciation and confidence.

5. Make a small scrapbook using pictures, drawings, or cuttings.

Include:

My family

My favorite food

Places I visited

Summer fruits

My hobbies

Write 2–3 sentences about each topic.

6. Treasure Hunt of Words

Find and write:

10 naming words (nouns)

5 action words (verbs)

5 describing words (adjectives)

You can search from:

Newspapers, Storybooks, Magazines

7. Fun Grammar Worksheet

A. Circle the proper noun and underline the common noun.

- i. The boy lives in Delhi.
- ii. The girl is playing with Riya.
- iii. The school celebrated Sports Day at St. Mary School.
- iv. The river Ganga is very long.
- v. The country India is famous for its culture.

B. Fill in the correct adjective.

- i. The elephant is very _____. (big / sweet)
- ii. I ate a _____ mango yesterday. (juicy / cold)
- iii. The rabbit has _____ ears. (long / tiny)
- iv. We saw a _____ rainbow in the sky. (colorful / weak)

v. My grandmother is very _____. (kind / noisy)

C. Underline the verb.

i. Rahul runs fast.

ii. The baby cried loudly.

iii. We play cricket every evening.

iv. Mother cooks delicious food.

v. The birds fly in the sky.

Note – Revise Chapter 1 and 2 as done in book and notebook.

Do Page number 19,20 ,21 and 22 of your English Companion Book.

ALL Activity:-

States:- Punjab and Odisha

Draw or paste picture of one child wearing Punjabi dress and one child wearing Odisha traditional dress. Write 4–5 describing words for each.

Note:- Summer Reading Creative Writing task will be shared shortly.

HINDI

1. दिए गए अपठित गद्यांश को पढ़कर पूछे गए प्रश्नों के उत्तर लिखिए।

किसी जंगल में एक डाकू रहता था। वह लोगों को मार कर उनकी अंगुली काट लेता था। बाद में उनकी माला बनाकर अपने गले में डाल लेता था। इसलिए लोग उसे अंगुलिमाल बुलाते थे। एक बार जंगल से महात्मा बुद्ध गुजर रहे थे। उन्हें देखते ही अंगुलिमाल प्रसन्न हो गया कि आज उसे कुछ और अंगुलियां माला में पिरोने के लिए मिलेगी। उसने महात्मा बुद्ध को गरजते हुए कहा - ठहर जा महात्मा बुद्ध ने शांत स्वभाव से मुस्कराते हुए कहा - मैं तो ठहर गया पर तुम कब ठहारोगे? अंगुलिमाल हैरान रह गया। उसने बुद्ध से पूछा क्या तुम्हें मुझसे डर नहीं लगा? बुद्ध शांत भाव से बोले पुत्र इस संसार में ऐसा कौन है जो मरा नहीं, एक दिन तो सभी को मरना है फिर मृत्यु से डर कैसा?

i-डाकू लोगों को मार कर उनका क्या काट लेता था?

क-अंगुली

ख-हाथ

ग-पैर

ii-जंगल में कौन रहता था?

क शेर

ख-घोड़ा

ग-डाक

iii-अंगुलिमाल किस बात पर हैरान हो गया?

iv-अंगुलिमाल महात्मा बुद्ध को देखकर प्रसन्न क्यों हुआ ?

v-विलोम शब्द लिखें-

क-एक

ख-शांत

2-अपना परिचय दें--

मेरे बारे में

मेरा नाम _____
मेरा जन्मदिन _____
मेरी ऊँचाई _____
मेरा वजन _____
मेरा सबसे अच्छा दोस्त _____
मुझे क्या पसंद है _____
मेरा पसंदीदा रंग _____
मेरा पसंदीदा खाना _____
मेरा पसंदीदा खेल _____
मेरा पसंदीदा जानवर _____
मैं कहाँ रहता/रहती हूँ _____
मेरे माता-पिता के नाम _____

मेरी पसंदीदा चीज
(चित्र बनाइए)



मुझे अच्छा लगता है
(चित्र बनाइए)



एकवचन - बहुवचन

सही वचन से खाली स्थान भरो।

1. मैंने एक _____ (फूल / फूलों) को देखा।
2. बच्चे _____ (पुस्तक / पुस्तकें) पढ़ रहे हैं।
3. बगीचे में कई _____ (पक्षी / पक्षी) उड़ रहे हैं।
4. माँ ने एक _____ (रोटी / रोटियाँ) बनाई।
5. मेरे पास दो _____ (कुर्सी / कुर्सियाँ) हैं।
6. मेरे पास दो _____ (कुर्सी / कुर्सियाँ) हैं।
7. मेले में बहुत _____ (दुकान / दुकानें) हैं।
8. मेरे पास एक _____ (गाड़ी / गाड़ियाँ) हैं।
9. हम रोज _____ (आम / आमों) हैं।
10. डिब्बे में बहुत से _____ (लड्डू / लड्डुओं) हैं।

4. बूझो तो जानें -

निम्न लिखित वर्ग पहेली में नीचे दिए गए शब्दों को खोजकर गोला बनाए।

अनार सितार झुमका बादल नीला
पपीता जामुन नाशपती किताब कछुआ

प	ह	त	वा	सि	ता	र	कु
पी	खी	कि	ता	ब	म	गी	बा
ता	पि	अ	ना	घी	टु	ठा	द
डि	हु	ना	फी	जा	मु	न	ल
ब	क	र	भा	यी	रू	ली	व
शा	छु	षी	ग	झु	म	का	धा
का	आ	सि	ट	ठि	द	नी	ली
ना	श	पा	ती	थी	वा	ला	स

वर्ग पहेली

निम्न वर्ग पहेली में बाँईं ओर दिए निर्देश के अनुसार वर्ग पहेली पूरी करो -

1. मृत्यु का देवता
2. राजा का महल
3. गाँवों में रोशनी देने वाला यंत्र
4. ——— बुरी बला है
5. गाँधीजी का हथकरघा
6. जो भरा नहीं है
7. सदाबहार वृक्ष का रसीला फल
8. तीव्र गति से दौड़ने वाला जानवर
9. चाभी से खुलने वाला
10. ललाइन का पुल्लिंग
11. योग्य/समर्थ का पर्याय
12. कबूतर का पर्याय
13. कौरवों व पांडवों के युद्ध का वर्णन



6 'हिंदी भाषा का महत्व' विषय पर पाँच पंक्तियों में अनुच्छेद लिखें।

7. विशेष-सारा कार्य सुंदर लेखनी में लूज शीट पर करें।

8- पंजाब और उड़ीसा के प्रमुख व्यंजनों के चित्र A4 सीट पर चिपकाएँ एवं दो-दो वाक्य लिखें ।

PUNJABI

1. ਵਰਨਮਾਲਾ ਪੂਰੀ ਕਰੋ।

.....	ਅ	ਸ	ਹ
ਕ	ਗ	ਘ
.....	ਙ	ੜ	ਲ
.....	ਠ	ਡ	ਲ਼
ਤ	ਦ	ਨ
ਪ	ਬ	ਮ
.....	ਰ	ਲ਼

2. ਆਪਣੇ ਮਨ ਪਸੰਦ ਫਲ ਦੀ ਤਸਵੀਰ ਬਣਾ ਕੇ ਉਸ ਬਾਰੇ ਪੰਜ ਵਾਕ ਲਿਖੋ।

A large rectangular box with an orange border, containing a blank space at the top and a series of horizontal lines for writing below.

4. ਵਰਕਸ਼ੀਟ (ਵੱਡਾ ਕੰਣ)

ਪ੍ਰਸ਼ਨ-1 (i) ਸ਼ਬਦ ਅਰਥ

(ੳ) ਏਕਤਾ - _____

(ਅ) ਘਿਸਰਦੀ - _____

(ii) 'ਹੱਥ' ਸ਼ਬਦ ਦਾ ਵਾਕ ਬਣਾਓ:-

(iii) ਖਾਲੀ ਥਾਂਵਾਂ ਭਰੋ:-
(ੳ) ਏਕਤਾ ਵਿੱਚ _____ ਹੈ।

(ਅ) ਅਨਪੜ੍ਹ ਲੋਕ ਦਸਤਖ਼ਤ ਕਰਨ ਦੀ ਥਾਂ _____ ਦੀ ਵਰਤੋਂ ਕਰਦੇ ਹਨ।

(iv) ਹੇਠਾਂ ਲਿਖੇ ਪ੍ਰਸ਼ਨਾਂ ਦੇ ਉੱਤਰ ਲਿਖੋ :-

(ੳ) ਅਖੀਰ ਸਾਰੀਆਂ ਉਂਗਲਾਂ ਕਿਸ ਕੋਲ ਪੁੱਜੀਆਂ ?

(ਅ) ਅੰਗੂਠੇ ਨੇ ਦਿਮਾਗ ਨੂੰ ਆਪਣੇ ਬਾਰੇ ਕੀ ਕਿਹਾ ?

(v) ਆਪਣੇ ਸਕੂਲ ਦੇ ਪ੍ਰਿੰਸੀਪਲ ਸਾਹਿਬਾਨ ਜੀ ਨੂੰ ਜ਼ੁਰਮਾਨਾ ਮੁਆਫ਼ੀ ਦੀ ਛੁੱਟੀ ਲਈ ਬਿਨੈ- ਪੱਤਰ ਲਿਖੋ। (ਨੋਟ:-
ਸਕਰੈਪ ਕਾਪੀ ਉੱਤੇ ਕਰੋ)

5. ਅਸੁੱਧ ਸੁੱਧ:

	ਅਸੁੱਧ ਸ਼ਬਦ	ਸੁੱਧ ਸ਼ਬਦ
1.	ਸਕੂਲ	_____
2.	ਕਹਾਨੀ	_____
3.	ਮਹਿਨਤ	_____
4.	ਪੜਾਈ	_____
5.	ਦੋਸਤਤ	_____
6.	ਮਿਠਾਈਆਂ	_____
7.	ਸਵੇਰਰ	_____
8.	ਅਧਿਆਪਕ	_____
9.	ਖੇਡਣਾ	_____
10.	ਘਰਰ	_____

6. ਵਚਨ ਬਦਲੋ :

1. ਮੁੰਡਾ _____
2. ਕੁੜੀ _____
3. ਕਿਤਾਬ _____
4. ਬੱਚਾ _____
5. ਪੰਛੀ _____
6. ਗਾਂ _____
7. ਫੁੱਲ _____
8. ਖਿਡੌਣਾ _____
9. ਕੁਰਸੀ _____
10. ਰੁੱਖ _____

7. ਹੇਠਾਂ ਦਿੱਤੇ ਚਿੱਤਰ ਨੂੰ ਵੇਖ ਕੇ ਆਪਣੇ ਵਿਚਾਰ ਲਿਖੋ। (8-10 ਸਤਰਾਂ)



8. ਆਪਣੇ ਪਰਿਵਾਰ ਦੀ ਸੁਹਣੀ ਤਸਵੀਰ ਬਣਾਓ ਅਤੇ ਹਰ ਮੈਂਬਰ ਦਾ ਨਾਮ ਪੰਜਾਬੀ ਵਿੱਚ ਲਿਖੋ।

9. ਘਰ ਵਿੱਚ ਪਈਆਂ ਪੁਰਾਣੀਆਂ ਚੀਜ਼ਾਂ ਦੀ ਵਰਤੋਂ ਕਰਦੇ ਹੋਏ ਕੋਈ ਇੱਕ ਤੋਹਫ਼ਾ ਬਣਾਓ। (ਪੰਜਾਬ ਅਤੇ ਉੜੀਸਾ)

10.(i) ਵਿਆਕਰਨ ਦੀ ਪਾਠ ਸੰਬੰਧੀ ਲੇਖ :- (ਮੇਰਾ ਘਰ, ਅੰਬ) ਅਤੇ ਕਹਾਣੀ :- (ਚਲਾਕ ਲੁੰਬੜੀ) ਪੜ੍ਹੋ।

(ii) ਜਮਾਤ ਵਿੱਚ ਕੀਤੇ ਗਏ ਕੰਮ ਦੀ ਦੁਹਰਾਈ ਕਰੋ।

ਨੋਟ:- ਸਾਰਾ ਕੰਮ ਸਕਰੈਪ ਕਾਪੀ ਉੱਤੇ ਕਰੋ।

SCIENCE

Different Types of Plants:Case Study

1.Read the passage carefully and answer the following questions.

Trees are big and strong plants. They have thick woody stems called trunks. Trees live for many years and provide us with fruits, wood, shade, and oxygen. Mango, neem, and banyan are examples of trees. Shrubs are medium-sized plants. They are smaller than trees and have woody stem. Rose and hibiscus are common shrubs. Shrubs make gardens beautiful with their flowers. Small plants with soft green stem is called herbs. Mint, coriander and basil are the examples of herbs. Some plants have weak stems and cannot stand upright. They need support to grow upward. Money plant and grapevine are climbers. Creepers grow along the ground. Pumpkin and watermelon plants are creepers. Roots grow under the soil. They absorb water and minerals for the plant. Some plants have one thick root called a taproot, like carrot and radish. Some plants have many thin roots called fibrous roots, like grass ,wheat and Aloe-Vera.

Note :- Take reference from the given link to understand the concept of different types of plants . <https://youtu.be/fHuVxzFDAVU>

i).What are trees?Give two examples of trees.

ii) Why do climbers need support?

iii). What do roots absorb for the plant?

iv) Where do creepers grow? Give examples also.

v) Give two examples of each.







a) Tap Root: _____, _____

b) Fibrous Root: _____, _____

c) Herbs: _____, _____

d) Shrubs: _____, _____

2. Look at the pictures and find out taproot and fibrous root.

	TAPROOT	FIBROUS ROOT
		
		
		
		
		
		

Life processes of living things

Match the life process with its definition:

Life Processes

Definition

- | | |
|-----------------|--|
| 1. Movement | Getting energy from food |
| 2. Respiration | Getting rid of waste |
| 3. Sensitivity | Making more living things of the same type |
| 4. Growth | Taking in and using food |
| 5. Reproduction | All living things move, even plants |
| 6. Excretion | Detecting changes in the surroundings |
| 7. Nutrition | All living things grow |

Write the correct life process beside each statement.

1. Eating your dinner _____.
2. Urinating _____.
3. Getting older _____.
4. A big cut healing by itself _____.
5. Sweating after running from a dog _____.
6. Waving at your sibling _____.
7. Blinking if a hand is near your eye _____.

Hello!! Today we have two activities.

Let's work!!

Date:


good morning!



1. Read and write the correct word.

Carnivores

Carnivores eat animals. **Lions, crocodiles** and **tigers** are carnivores. Tigers eat monkeys, snakes and big animals. They can swim and they eat fish and frogs too. Look at this tiger. It's hunting in the jungle.



Herbivores

Herbivores eat plants. **Zebras, gorillas** and **elephants** are herbivores. African elephants eat 150 kilos of plants a day. They drink 60 litres of water too. Look at this elephant. It's drinking from a river.



Omnivores

Omnivores eat animals and plants. **Flamingoes, chimpanzees** and **ostriches** are omnivores. Ostriches



eat fruit, plants, insects and small animals. Look at this ostrich. It's eating a plant.

1. Tigers eat _____, snakes and big animals.
2. The tiger is _____, in the jungle.
3. Zebras, gorillas and elephants are _____.
4. African elephants eat _____ kilos of plants a day.
5. _____ eat animals and plants.
6. The _____ is eating a plant.

Note :- Take reference from the given link to understand the concept of eating habits of animals: <https://youtu.be/x9JKuL1hCK8>

What am I?

Read the descriptions. Match the pictures to the descriptions. What animal is it?

I'm a wild animal. I'm dangerous. I live in the jungle. I'm orange with black stripes. I have got four legs, a long tail and sharp teeth. I can run very fast and I can climb trees.

I'm a wild animal. I'm dangerous. I live in the jungle. I have got a long body. I haven't got legs or feet. I can slither, but I can't walk.

I'm a domestic animal. I'm not dangerous. I live in the water. I am small and orange. I've got fins and scales. I can swim, but I can't walk.

I'm a wild animal. I'm not dangerous. I live in the water. I'm black and white. I have got a beak, two wings (flippers) and two legs. I can swim, but I can't fly.

I'm a wild animal. I live in the jungle. I'm grey. I have got a big body, big ears and a long trunk. I haven't got wings. I can run, but I can't jump.

I'm a wild animal. I'm dangerous. I live in the water. I'm green. I have got a long tail, four short legs and a big mouth. I've got sharp teeth, too. I can swim, but I can't fly.

1



2



3



4



5



6



7



8



Reproduction in Animals

Classify the animals based on their groups

Cat ,Snake, Crocodile ,Dog, Lion, Spider, Duck, Humans, Cow, Fish, Elephant , Hen

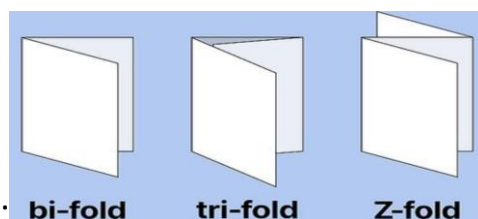
Animals that Lay Eggs	Animals that Give Birth

Note:- Do Exercise 1a,1b,2a,2b of companion book.

ALL Activity:

Make a brochure showing pictures and information about the native plants of punjab.(Roll no-1 to 20)

Make a brochure showing pictures and information about the native plants of Odisha.(Roll no- 21 onwards)



Sample of brochure:

bi-fold

tri-fold

Z-fold

SOCIAL STUDIES

Activity 1 Do pages of companion book 1,2,11,12,13,14

Activity 2 :- Describe the picture on the given points:-



- i) What message does this picture give about pollution and saving trees?
- ii) Why is the boy carrying an oxygen cylinder while planting a sapling?
- iii) How can planting trees help reduce air pollution?
- iv) What may happen if people continue cutting trees and polluting the environment?
- v) Suggest two ways to protect our environment .
- vi) Prepare one slogan to avoid Air Pollution . Make it as colourful as you can on A4 sheet.

Activity 3 :-

My Family.

Choose the correct word to fill the blanks.

1. Father and mother are called _____.
2. The parents of our _____ are called grandparents.
3. A _____ family has three to four members.
4. A big family is also called a _____.
5. A small family is also called a _____.
6. A _____ family has more than four members.
7. A _____ shows the members of the family.
8. Parents _____ of their children.
9. We must _____ our elders.
10. A father, a mother, and their children make a _____.
11. A brother of your father is an _____ to you.
12. A daughter of your aunt is a _____ to you.

joint family	small	big	family tree
respect	parents	nuclear family	cousin
uncle	take care	family	parents

Activity 4 Watch the link carefully and answer the following questions :-

<https://youtu.be/ojpU-bYaqBk>

- i) When did India become independent ?
- ii) When did Pakistan become independent ?
- iii) Who was the last Governor-General of India ?
- iv) Name any two Indian national festivals shown in the video.
- v) When did India become a republic?
- vi) Who killed Mahatma Gandhi ?

“Make flashcards on Indian national leaders who sacrificed their lives for freedom.”

Activity 5:- Art Integrated Activity Punjab and Odisha

Browse the internet to find the following information of the paired States - Punjab and Odisha. Fill the comparative table:-

Information	Punjab	Odisha
language		
Capital		
Game		
Chief Minister		
Governor		
State fruit		
Holy book		
State bird		

Note :- Do the above worksheet on loose four lines sheet .

MATHS

Based on Chapters:

- Shapes Around Us
- Numbers up to 4 Digits
- Addition and Subtraction
- Number Play

Instructions

- Complete the work neatly in a separate notebook/file.
- Use colours wherever needed.
- Attempt all activities creatively.
- Revise tables from 2 to 15 regularly.

Worksheet 1 – Shapes Around Us

A. Identify the Shape

1. A football – _____
2. A window – _____
3. A dice – _____

4. A birthday cap – _____

5. A wheel – _____

B. Count and Write

1. Number of sides in a triangle = _____

2. Number of corners in a rectangle = _____

3. Shape with no corners = _____

C. Draw and Colour

a. rectangle

b. circle

c. cone

d. cube

D. HOTS Questions

1. Which shape can roll and slide both? Explain.

2. Why are wheels circular and not square?

E. Activity Time

Make a "Shape Hunt Chart" by finding 10 objects from your home and writing their shapes.

Worksheet 2 – Numbers up to 4 Digits

A. Write in Figures

1. Three thousand four hundred twenty-one = _____

2. Nine thousand fifteen = _____

B. Expanded Form

1. 4,582 = _____

2. 7,309 = _____

C. Ascending and Descending Order

Arrange in ascending order:

4,567 ; 2,345 ; 8,901 ; 1,210

D. Place Value

1. 5 in 3,582 = _____

2. 7 in 7,164 = _____

E. HOTS Questions

1. Make the greatest 4-digit number using digits 3, 5, 1, 8.

F. Activity Time

Use old newspapers/magazines and cut out 5 four-digit numbers. Paste them and write:

- Number name
- Expanded form

Worksheet 3 – Addition and Subtraction

A. Solve

1. $3,456 + 2,143 =$ _____

2. $8,902 - 3,421 =$ _____

3. $2,345 + 1,111 =$ _____

4. $7,654 - 2,210 =$ _____

B. HOTS Questions

1. Which is greater:

- $4,999 + 1$
- $5,100 - 50$

Worksheet 4 – Number Play

A. Write in ascending & descending order

1. 4361, 3078, 5894, 2379

2. 7409, 2745, 5788, 1908

B. Observe the pattern and fill in the blanks

1. 125, 225, 325, ____, ____

2. 900, 800, 700, ____, ____

C. HOTS Question

1. Which number comes exactly between 4,999 and 5,001?

Activity-Based Worksheet 5 – Maths Art

Shape Rangoli Activity

Create a colourful rangoli using:

- Circles
- Triangles
- Squares

- Rectangles

Count how many shapes you used and write below the drawing.

ALL Worksheet 6 – Punjab and Odisha Integrated Learning

A. Shapes Around Us

1. Draw the shape of:

- A Punjabi dhol
- Konark Wheel of Odisha
- Golden Temple window

B. Pattern Activity

Draw and colour:

- Punjabi Phulkari patterns
- Odisha Pattachitra patterns

Bonus Challenge

- Learn tables from 2–15.
- Solve one mental maths question daily.
- Play board games like Ludo/Snakes & Ladders to improve counting skills.

COMPUTER

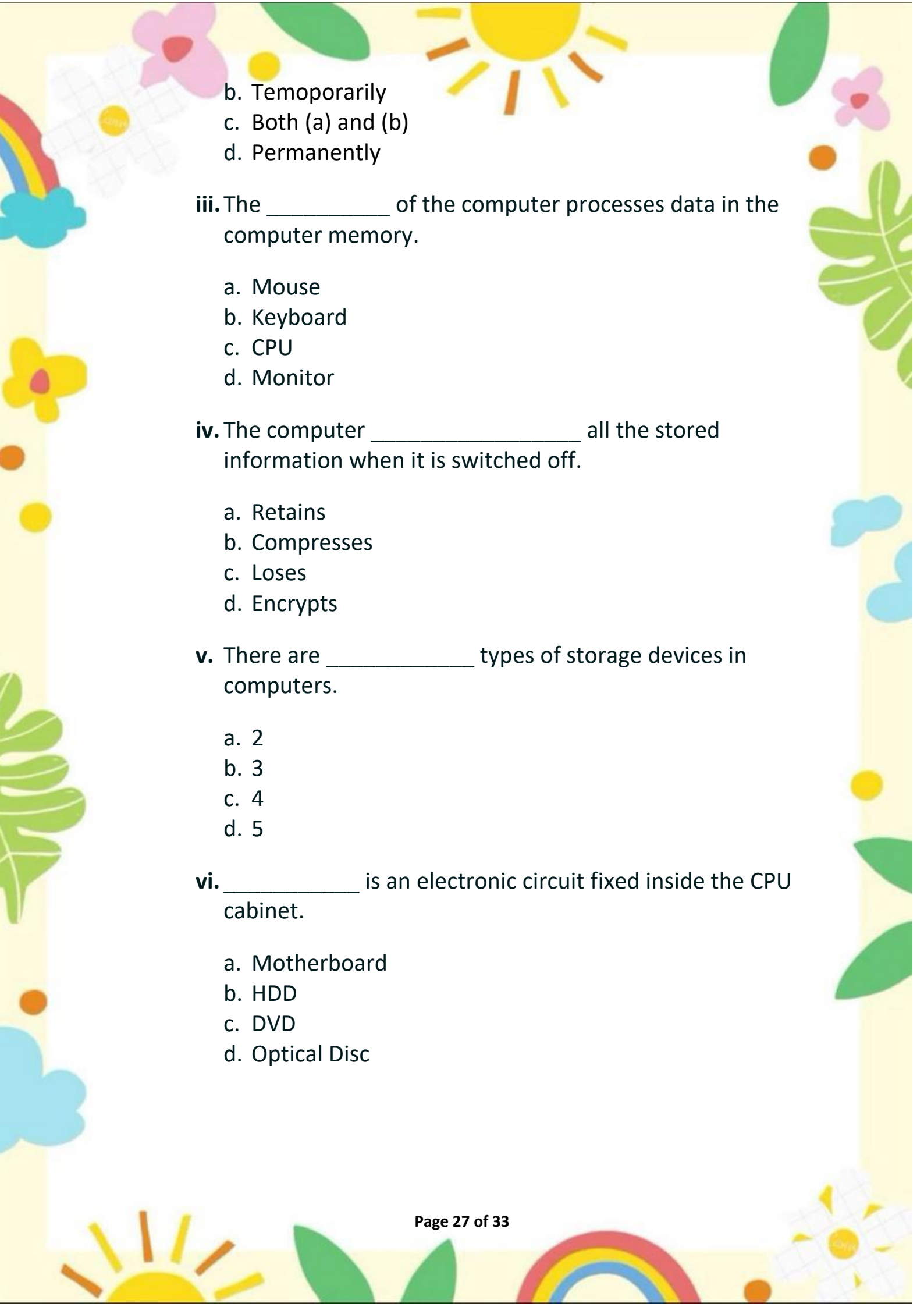
1. Tick the correct answer:

i. _____ are hardware devices that store information.

- a. Peripheral devices
- b. Input Devices
- c. Output Devices
- d. Storage Devices

ii. Storage devices store information _____.

- a. Never

- 
- b. Temporarily
c. Both (a) and (b)
d. Permanently
- iii. The _____ of the computer processes data in the computer memory.
- a. Mouse
b. Keyboard
c. CPU
d. Monitor
- iv. The computer _____ all the stored information when it is switched off.
- a. Retains
b. Compresses
c. Loses
d. Encrypts
- v. There are _____ types of storage devices in computers.
- a. 2
b. 3
c. 4
d. 5
- vi. _____ is an electronic circuit fixed inside the CPU cabinet.
- a. Motherboard
b. HDD
c. DVD
d. Optical Disc

Desktop Icons

Match the following desktop icons with their names.



● My Documents



● Recycle bin - empty



● Network



● My PC




● Recycle bin - full

Hardware and software activity

Drag and drop the picture in the correct column

Hardware



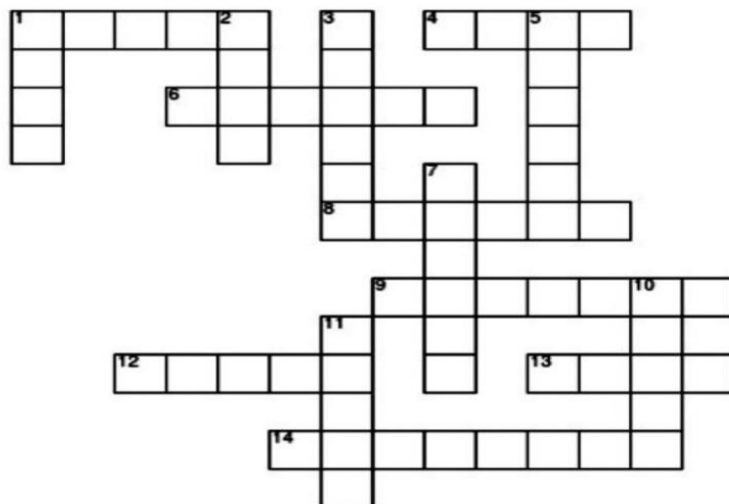
Software



GENERAL KNOWLEDGE

1. Crossword puzzle:-

Plants



www.HaveFunTeaching.com

ACROSS

- 1 New plants grow from tiny _____.
- 4 Like all living things, plants _____ and change.
- 6 The _____ of a plant grow on the stem.
- 8 Roots hold plants in the _____.
- 9 Most plants have _____ that make seeds.
- 12 All plants need sunlight, food, and _____.
- 13 The stem carries _____ and water to all the parts of the plant.
- 14 Plants use _____ to stay healthy.

DOWN

- 1 A tiny _____ can grow into a beautiful plant.
- 2 The part of the plant that holds the plant up straight is the _____.
- 3 Plants are _____ things.
- 5 Plants give off _____ to help us breathe.
- 7 Insects carry _____ from flower to flower.
- 10 The _____ of a plant take in water and minerals from the soil.
- 11 Sometimes, a plant can grow _____ that we can eat.

WORD BANK: Flowers, food, fruit, ground, grow, leaves, living, minerals, oxygen, pollen, roots, seed, seeds, stem, water.

2. Who's Who

(i) Who is the President of India ?

(ii) Who is the Chief Minister of Punjab ?

(iii) Who is the Prime Minister of India ?

(iv) Who is the speaker of Lok Sabha ?

(v) Who is the police commissioner of Jalandhar ?

3. Match Ups:-

- | | |
|----------------------|-----|
| (i) Police | 108 |
| (ii) Fire Brigade | 139 |
| (iii) Ambulance | 100 |
| (iv) Railway station | 101 |

4. Video Time

Watch any 2 short educational videos related to GK of the following suggested topics:-

Suggested Topics:

*Solar System

*National Symbols

*Save Water

*Good Habits

(i) Name of the video: _____

What did you learn? _____

(ii) Name of the video: _____

What did you learn? _____

5. Quiz Time

Tick (✓) the correct answer.

(i) How many colors are there in a rainbow?

5 7 9

(ii) Which animal is called the Ship of the Desert?

Horse Camel Tiger

(iii) Which festival is known as the Festival of Lights?

Holi Diwali Eid

(iv) Which is the largest planet?

Earth Mars Jupiter

(v) Who is known as the Father of the Nation?

- Mahatma Gandhi Nehru Bhagat Singh

6. Creative Activity ✨

Make any ONE:

- * National Flag
- * Healthy Food Collage
- * My Favourite Animal Scrapbook

7. Family GK Time 👨👩👧

Ask your grandparents or parents about:-

- (i) What games did they play in childhood?
- (ii) What was their favourite cartoon/story?

Write any 4 lines about it.

ART & CRAFT

Mosaic painting

- Kindly refer to the picture and prepare a beautiful painting accordingly. Students may seek guidance and assistance from their elders, if required.
- Cut colourful paper and paste on Cardboard or Canvas.





- <https://youtube.com/shorts/gGnqaavH1u0?si=CzeNmoWfFRq21xZS>
- <https://youtube.com/shorts/g4H6I417LgM?si=kXWVQSH3PxtJ9W5y>

❁ Eco Club Summer Green Mission ❁

Theme for the Session

“Small Green Steps, Big Future Changes”

Eco Club Slogan

“Save Nature Today, Secure Tomorrow.”

Event Name

🌱 **“Plant for Papa” – A Green Tribute Drive** 🌱

Activity Details

Students will plant any one of the following:

- A tree
- Flowering plant
- Medicinal plant
- Fruit plant

The plant may be planted:

- Near home
- In a park
- Society area
- Garden
- Village/community space

Students Will Submit on an A4 Sheet:

📷 Paste 1–2 photographs while planting.

📝 Write the following details:

- Plant Name
- Place of Plantation
- Why you chose the plant

🗒️ Mention the line:

“This plant is dedicated to my father/family.”

Suggested Plants

Neem, Tulsi, Aloe Vera, Hibiscus, Mango, Guava, Lemon, Marigold, etc.

**HAPPY
HOLIDAYS**