



Sanskriti KMV SCHOOL

Session-2024-25

Summer Break Assignments

Grade-III

“School is off as summers in, Let the boredom stop and the Fun begin”

Dear Parents

Vacation is a welcome break! It is a golden period for family reunion and utilizing it in the most fruitful manner. So staying inside, beating the scorching heat of summers and to avoid being monotonous few fulfilled activity based tasks have been designed for the students so that they can spend their relaxation time in the most constructive way. But before advancing towards it, few points need to be taken into consideration:

- Students should complete their Holidays Homework and submit it positively post vacation. It should be handed over to the Grade-Incharge in a single clear folder labelled properly with student’ s name, father’ s name, class and section.
- Prioritize their physical fitness. Follow regular Fitness Regime and maintain a balanced diet.
- Encourage your child to adopt any one bird during the vacation. Take proper care by feeding it at regular intervals.
- Involve children in household chores.
- Spend quality time with the grandparents and reduce the screen time.
- Keep a record of places visited, special days enjoyed, with the photograph with you.

Looking forward for a delightful fun filled time ahead!

Happy Holidays!

Subject – English

I. Let's Recapitulate !

Companion Book

Practise Pg 9 to 13 (Plural nouns)

Practise Pg 21,22 (Adjectives)

II. Let's Comprehend

Companion Book

Practise Pg18,19,20, 31,32

III. Diet Research

Companion Book

Prepare a personal weekly diet chart on A-4 sheet (Refer to sample on Pg 28,29,30)

Studio Book

Think and Ink-Pg 51,52

Note :- Do all the exercises in the book.

IV. Reading Campaign



Note-

15 days for Reading Campaign

Note-The information regarding the above activity will be floated in Class WhatsApp Group.

V. AIL Activity

Paste pictures of 5 main dishes of the following states on A4 sheet and name them.

(Roll nos 1 to 15) - Punjab State

Roll no.16 onwards - Odisha State


Subject-Hindi

1. पंजाब एवं उड़ीसा के प्रमुख व्यंजनों के चित्र चिपकाकर उनके नाम लिखें। [A4 शीट पर]


2.

नीचे उन खाने-पीने की चीज़ों के चित्र चिपकाएँ, जो सेहत के लिए लाभदायक होती हैं और जो सेहत के लिए नुकसानदायक होती हैं।

(i) सेहत के लिए लाभदायक -



(ii) सेहत के लिए नुकसानदायक -



3. उपयुक्त संज्ञा शब्द भरकर वाक्य पूरे कीजिए

1- _____ फलों का राजा कहलाता है।

2- _____ क्रिकेट का प्रसिद्ध खिलाड़ी है।

3- _____ के दिन हम विद्यालय नहीं जाते।

4- हमें सभी जीवों पर _____ करनी चाहिए।

5- _____ प्रसिद्ध ग्रंथ है।

4- "नेताजी का बचपन" पाठ का पठनपाठन करें एवं कठिन शब्दों को लिखकर अभ्यास करें।

5- कक्षा में कराए गए कार्य की दोहराई करें।

Subject- Punjabi

1. ਵਰਕਸ਼ੀਟ :- ਰਾਜੂ ਬਦਲ ਗਿਆ, ਵਰਨ ਅਤੇ ਵਰਨਮਾਲਾ

(i) ਸ਼ਬਦ ਅਰਥ:- (2M)

(ੳ) ਕਮਰ

(ਅ) ਸ਼ਰਮਸਾਰ

(ii) ਵਾਕ ਬਣਾਓ:- (1M)

ਮਾਮਾ

(iii) ਖਾਲੀ ਥਾਵਾਂ ਭਰੋ:- (4M)

(ੳ) ਪੰਜਾਬੀ ਭਾਸ਼ਾ ਵਿੱਚ _____ ਵਿਅੰਜਨ ਹਨ।

(ਅ) ਦੂਜੇ ਅੱਖਰ ਦੇ ਪੈਰਾਂ ਵਿੱਚ ਲਗਾਏ ਜਾਣ ਵਾਲੇ ਅੱਖਰਾਂ ਨੂੰ _____ ਆਖਦੇ ਹਨ।

(ੲ) ਮਾਮਾ ਜੀ ਰਾਜੂ ਲਈ _____ ਲਿਆਏ।

(ਸ) ਰਾਜੂ ਇੱਕ _____ ਮੁੰਡਾ ਸੀ।

(iv) ਪ੍ਰਸ਼ਨ/ਉੱਤਰ (3M)

(ੳ) ਨਾਸਕੀ ਅੱਖਰ ਲਿਖੋ?

(ਅ) ਕਿਸ ਨੂੰ ਆਪਣੀਆਂ ਚੀਜ਼ਾਂ ਲੱਭਣ ਸਮੇਂ ਕਈ ਘੰਟੇ ਲੱਗ ਜਾਂਦੇ ਸਨ?

(ੲ) ਰਸੋਈ ਘਰ ਵਿੱਚੋਂ ਰਾਜੂ ਨੂੰ ਕਿਹੜੀ ਕਿਤਾਬ ਮਿਲੀ ਸੀ?

(v) ਚਿੱਤਰ ਵਰਨਣ (A4 ਸ਼ੀਟ) ਜਾਂ ਸਜਾਵਟੀ ਸਮਾਨ ਦੀ ਵਰਤੋਂ ਕਰਦੇ ਹੋਏ ਇੱਕ ਤੋਹਫਾ ਬਣਾਓ

। (ਪੰਜਾਬ ਅਤੇ ਉੜੀਸਾ)



ਨੋਟ:- (i) ਵਿਆਕਰਨ ਦੀ ਪਾਠ ਪੁਸਤਕ ਸੰਬੰਧੀ ਲੇਖ ਪੜ੍ਹੋ :- 1.ਮੇਰਾ ਘਰ 2 ਮੇਰੇ ਪਤਿਯਾ ਜੀ

(ii) ਜਮਾਤ ਵੱਚਿ ਕੀਤੇ ਗਏ ਕੰਮ ਦੀ ਦੁਹਰਾਈ ਕਰੋ ।








Subject- Science

Spots and Stripes Come Alive

Animals are found all over the world-on land, in the sea, and in the air. They range in size from tiny worms too small to see without a microscope to massive whales that weigh more than aeroplanes. They move around in different ways, and there is huge variety in what they eat. This wide range of differences is called diversity.

Exercise 1: Choose a word from the box and write under each picture:

| | | | |
|---|-------|----------|-------|
| Exercise 1: Choose a word from the box and write under each picture: | | | |
| fox | zebra | cheetah | bear |
| wolf | panda | kangaroo | eagle |

| | | | |
|---|---|--|---|
|  1. <input style="width: 100%;" type="text"/> |  2. <input style="width: 100%;" type="text"/> |  3. <input style="width: 100%;" type="text"/> |  4. <input style="width: 100%;" type="text"/> |
|  5. <input style="width: 100%;" type="text"/> |  6. <input style="width: 100%;" type="text"/> |  7. <input style="width: 100%;" type="text"/> |  8. <input style="width: 100%;" type="text"/> |

Exercise 2: What animal is it? Read and write the words from Ex1.

| | |
|---|---|
| 1. It looks like a leopard. It has black spots and it can run fast. | <input style="width: 100%;" type="text"/> |
| 2. It is a big dog. It lives and hunts in groups. | <input style="width: 100%;" type="text"/> |
| 3. It is a strong bird and it can see very well. | <input style="width: 100%;" type="text"/> |
| 4. It is black and white. It likes bamboo. | <input style="width: 100%;" type="text"/> |
| 5. It is big and heavy. It likes honey and fish. | <input style="width: 100%;" type="text"/> |
| 6. It lives in Australia. It has a strong tail . It can jump fast. | <input style="width: 100%;" type="text"/> |
| 7. It has red-brown fur and a thick heavy tail. | <input style="width: 100%;" type="text"/> |
| 8. It looks like a horse. It has got black and white lines. | <input style="width: 100%;" type="text"/> |

3. Give two examples of each of the following.

a) Domestic Animals _____,



b) Wild Animals _____,

c) Insects _____,

d) Plant Eating Animals _____,

e) Flesh Eating Animals _____,


4. Circle the correct movement.

| | | |
|---|---|---|
| <p>a</p>  <p>A snake can <u>swim</u> / run.</p> | <p>b</p>  <p>A horse can fly / run.</p> | <p>c</p>  <p>A bird can jump / fly.</p> |
| <p>d</p>  <p>A monkey can swim / jump.</p> | <p>e</p>  <p>A fish can walk / swim.</p> | <p>f</p>  <p>A lion can walk / fly.</p> |
| <p>g</p>  <p>A parrot can fly / swim.</p> | <p>h</p>  <p>A kangaroo can jump / swim.</p> | <p>i</p>  <p>A zebra can fly / run.</p> |

5. Draw a plant with tap root and a plant with fibrous root also write the name of plant.



6. Label the different parts of a plant and write one use of each part.



7. Complete 2c Project time in the companion.(pg no-9,10)

#.AIL Activity-Paste 5-5 pictures of plants grown in Punjab and Odisha and write one -one feature of each on A4 Sheet to show their comparison.

Subject- Social Studies

A. Match the following:

(a)



1. Small joint family

(c)



2. Big joint family

3. Small nuclear family

(b)



4. Big nuclear family

(d)



B. Encircle the correct option:

1. Your brother/sister is your

(a) cousin

(b) sibling

(c) spouse

2. Uncle and aunt's children are called

(a) sisters

(b) brothers

(c) cousins

3. You are your parent's

(a) child

(b) aunt

(c) siblings

4. Your father's/mother's parents are your

(a) uncle

(b) grandparents

(c) son

5. Parents and children together make a

(a) family

(b) neighbourhood

(c) relatives

C. Find seven relationships in the word grid and encircle them:

| | | | | | | | |
|---|---|---|---|---|---|---|---|
| M | O | T | H | E | R | U | S |
| X | C | O | U | S | I | N | I |
| Z | Y | T | T | A | P | C | S |
| I | I | W | K | U | H | L | T |
| O | F | I | W | N | A | E | E |
| G | S | F | A | T | V | Q | R |
| Z | V | E | H | S | O | N | M |

A. Which of the following are safe? Put a (✓) mark for safe and put (✗) mark for unsafe things.



AIL - Paste the pictures of famous food items of Punjab and Odisha on A3 sheet.

Subject- Maths

1. Fill in the blanks :-

- (a) A triangle has _____ sides.
(b) A cylinder has _____ faces.
(c) A square has _____ sides and _____ corners.
(d) A cone has _____ flat and _____ curved face.
(e) A circle has _____ diagonals.

2. Write the following in Standard form.

- a) $5000+400+30+2=$ _____
b) $7000+9 =$ _____

3. Write the following numbers in the expanded form.

- a) 9514: _____
b) 4024 : _____

4. Write the place, face value, place value of the highlighted digits.

| Number | Place | Face value | Place value |
|--------|-------|------------|-------------|
| 6562 | | | |
| 4301 | | | |

5. Use the given digits to make the largest and the smallest possible 4 digit numbers.

- a) 3,0, 4, 2 _____ . _____
b). 5,6,1,2 _____ . _____

6. Draw any two solid shapes and write its faces, edges and corners.

7. Do pages 12 to 16 of the Maths Companion Book.

8. AIL ACTIVITY











Make any one cultural item of Punjab or Odisha using 2D and 3D shapes. You may use toothpicks, clay or waste material according to your choice.

Subject- Computer

Find and tick (✓) the correct answer.

| | |
|---|---|
|  <ul style="list-style-type: none"><input type="checkbox"/> Television<input type="checkbox"/> Printer<input type="checkbox"/> Monitor |  <ul style="list-style-type: none"><input type="checkbox"/> CPU<input type="checkbox"/> Webcam<input type="checkbox"/> Monitor |
|  <ul style="list-style-type: none"><input type="checkbox"/> Hard disk<input type="checkbox"/> Joy stick<input type="checkbox"/> Projector |  <ul style="list-style-type: none"><input type="checkbox"/> Microphone<input type="checkbox"/> Speaker<input type="checkbox"/> Headset |
|  <ul style="list-style-type: none"><input type="checkbox"/> CD/DVD<input type="checkbox"/> Data card<input type="checkbox"/> Pen drive |  <ul style="list-style-type: none"><input type="checkbox"/> Scanner<input type="checkbox"/> Printer<input type="checkbox"/> Hard disk |
|  <ul style="list-style-type: none"><input type="checkbox"/> Hard disk<input type="checkbox"/> Touch screen<input type="checkbox"/> Light pen |  <ul style="list-style-type: none"><input type="checkbox"/> Webcam<input type="checkbox"/> Scanner<input type="checkbox"/> Projector |

Look at the different items in the chart below. Write if they are **HARDWARE** or **SOFTWARE** in their respective columns.

| No | Nama | Device/Program | Software | Hardware |
|----|----------------------------|---|----------|----------|
| 1 | Monitor |  | | |
| 2 | Windows (Operating System) |  | | |
| 3 | Mouse |  | | |
| 4 | Printer |  | | |
| 5 | Chrome |  | | |
| 6 | Microsoft Word |  | | |
| 7 | Keyboard |  | | |
| 8 | Speaker |  | | |
| 9 | Tux Paint |  | | |
| 10 | Spreadsheets |  | | |



Let suppose your friend is going to visit Jagannath Temple, Similipal National Park, Bhitarkanika National Park in ODISHA this summer vacations. Suggest him any 3 gadgets that he can carry with him to click pictures with his family.

1. _____
2. _____
3. _____


Subject- G.K.

Identify the pictures

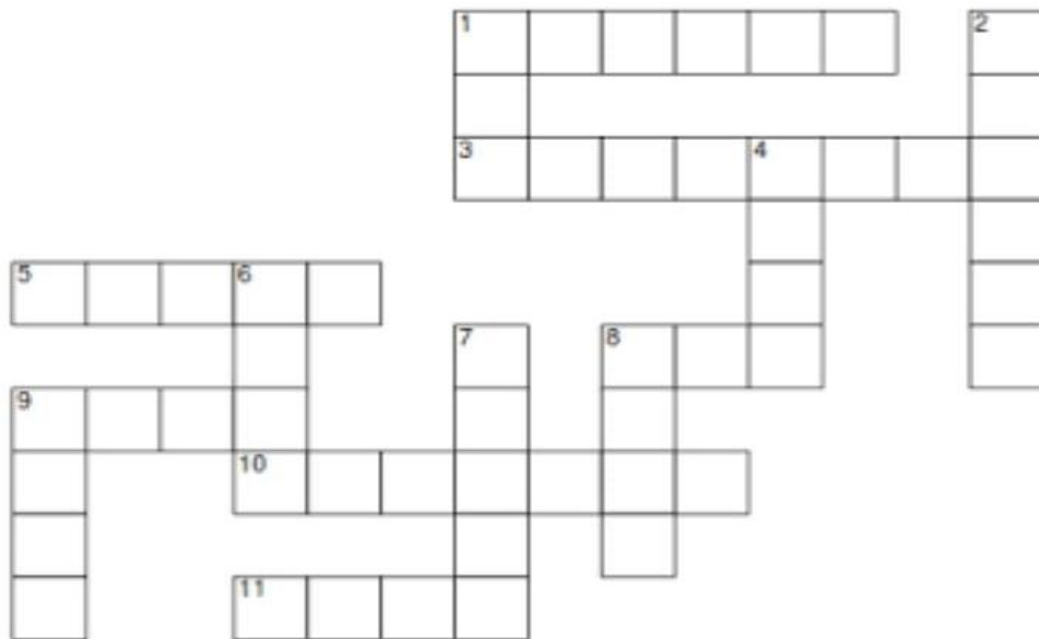








Solve the crossword puzzle



ACROSS

- 1 baby cat
- 3 baby duck
- 5 baby hen
- 8 baby lion
- 9 baby horse
- 10 baby frog
- 11 baby kangaroo

DOWN

- 1 baby goat
- 2 baby pig
- 4 baby sheep
- 6 baby donkey
- 7 baby dog
- 8 baby cow
- 9 baby deer

Subject- Art

Draw and Colour Emojis Cut out (At least four)



