



# Sanskriti KMV SCHOOL

## Session-2023-24

### Summer Break Assignments

### Grade-IV

**“School is off as summers in, Let the boredom stop and the Fun begin”**

#### Dear Parents

Vacation is a welcome break! It is a golden period for family reunion and utilizing it in the most fruitful manner. So staying inside, beating the scorching heat of summers and to avoid being monotonous few fulfilled activity based tasks have been designed for the students so that they can spend their relaxation time in the most constructive way. But before advancing towards it, few points need to be taken into consideration:

- Summer Break: -28<sup>th</sup>, May, 2023 to 2<sup>nd</sup>, July 2023. School will reopen on 3<sup>rd</sup>, July 2023.
- Students should complete their Holidays Homework and submit it positively post vacation. It should be handed over to the Grade-Incharge in a single clear folder labelled properly with student's name, father's name, class and section.
- Prioritize their physical fitness. Follow regular Fitness Regime and maintain a balanced diet.
- Encourage your child to adopt any one bird during the vacation. Take proper care by feeding it at regular intervals.
- Involve children in household chores.
- Spend quality time with the grandparents and reduce the screen time.
- Keep a record of places visited, special days enjoyed, with the photograph in a scrap book.

***Looking forward for a delightful fun filled time ahead!***

**HAPPY HOLIDAYS!**

# ENGLISH

## Mindblowing Facts!

1. Soil is full of life.
2. It snows in Sahara Desert.
3. There is enough gold inside Earth to coat the planet.
4. Human beings can use only a small fraction of Earth's water.
5. Lemons float but limes sink.
6. No number before 1000 contains the letter 'A.'
7. Bees can fly higher than Mount Everest.
8. Bees can make coloured honey.
9. Climate change is causing flowers to change colour.
10. Active bacteria found in curd helps in digestion.



Hello ! I am \_\_\_\_\_

1. My childhood nickname is \_\_\_\_\_.

2. My biggest role model is \_\_\_\_\_.

3. My hobby I could never give up is \_\_\_\_\_.

4. I am good at \_\_\_\_\_.

5. My favourite comfort food is \_\_\_\_\_.

6. If I could have any superpower, it would be \_\_\_\_\_.

7. The person in my family with whom I share a good bonding is \_\_\_\_\_.

8. In an emergency, the first call I will make to \_\_\_\_\_.



**1. Read the following passage and answer the questions that follow.**

**As young children in the boarding house , there were many things that we were not allowed to do. We could not watch television after 8 p.m. Very often our housemaster , Mr. Harold , would say , ‘No, you may not!’**

**He felt that watching television was a sheer waste of time.**

**When it came to useful things , Mr Harold gave us his full support. One day I said , ‘Sir , we want to raise money for charity. Would you help us to put a play?’ His prompt reply was , ‘Yes , of course I will!’ I remember that together we put up the play “Charlie and the Chocolate Factory” and it was a great success.**

Why did the children want to put up a play?

Ans. \_\_\_\_\_  
\_\_\_\_\_

ii) Fill in the blank:

Children together put up the play “ \_\_\_\_\_ ”.

iii) True or false:

In the boarding school , the children could not watch television after 8 p.m.( )

iv) Tick the correct option:

Mr. Harold found watching television

- a) a useful activity
- b) a useless activity
- c) as no activity

v) From the passage

- a) Find the word which means ‘help’
- b) Find the opposite of ‘failure’

\_\_\_\_\_

\_\_\_\_\_

Ques 2. Jumbled Sentences

Arrange the words to make meaningful sentences.

1. cleaned my room I

---

2. playing am I football

---

3. dropped the Neha on the glass floor

---

4. Julie to is Mumbai going tomorrow

---

5. often walks he in park the

---

Ques 3. Circle the subjects and underline the predicates in the following sentences.

1. The elephant is eating grass.

.....

2. Hens live in a coop.

.....

3. The artist is playing the flute.

.....

4. Sonia is dancing.

.....

5. My sister woke up early in the morning.

.....

**Ques 4. Picture Composition**

Describe the following picture in 6 to 7 lines in a paragraph.



---

---

---

---

---

---

---

---

---

---

**Ques.5 ART INTEGRATED LEARNING ACTIVITY**

Paste pictures of 4 rivers of each state, name them and write 2-2 lines on each. ( Do it on A4 sheet)

**Punjab (1-15 Roll no.)**

Odisha(16 onwards)

Ques 6. Reading Campaign Activity.



## 15 DAYS OF READING CAMPAIGN

**Note:** The information regarding the above activity will be floated in Class WhatsApp group.




# HINDI

1. पंजाब एवं उड़ीसा के प्रमुख व्यंजनों के चित्र चिपकाकर उनके नाम लिखें। [A4 शीट पर]


2.

नीचे उन खाने-पीने की चीजों के चित्र चिपकाएँ, जो सेहत के लिए लाभदायक होती हैं और जो सेहत के लिए नुकसानदायक होती हैं।

(i) सेहत के लिए लाभदायक -



(ii) सेहत के लिए नुकसानदायक -



3. दिए गए शब्दों से कहानी पूरी कीजिएः

खाने-पीने, खाल, जोश, रेंकने, गधा, असलियत, खेत, धोबी, बाघ, आवाज़

## धोबी और गधा,

एक निर्धन धोबी था। उसके पास एक \_\_\_ था। गधा काफी कमजोर था क्योंकि उसे बहुत कम \_\_\_ को मिल पाता था। एक दिन \_\_\_ को एक मरा हुआ बाघ मिला। उसने सोचा, "मैं गधे के ऊपर इस बाघ की \_\_\_ डाल दूँगा और उसे पड़ोसियों के खेत में चरने के लिए छोड़ दिया करूँगा। किसान समझेंगे कि वह सचमुच का \_\_\_ है और उससे डर कर दूर रहेंगे और गधा आराम से \_\_\_ चर लिया करेगा। धोबी ने अपनी योजना पर अमल कर डाला। उसकी योजना काम कर गई। एक रात गधा खेत में चर रहा था कि उसे किसी गधे के रेंकने की \_\_\_ सुनाई दी। आवाज़ को सुनकर वह इतने \_\_\_ में आ गया कि वह भी ज़ोर-ज़ोर से \_\_\_ लगा। गधे की आवाज़ सुनकर किसानों को उसकी \_\_\_ का पता लग गया और उन्होंने गधे की खूब पिटाई की।

शिक्षा- अपनी सच्चाई कभी भी नहीं छिपानी चाहिए।

3. राष्ट्रभाषा हिंदी पर एक कविता A4 शीट पर लिखें।



# PUNJABI

1. ਹੇਠਾਂ ਲਿਖੇ ਪ੍ਰਸ਼ਨਾਂ ਦੇ ਉੱਤਰ ਲਿਖੋ:- (ਕੀ ਖਾਈਏ ਕੀ ਨਾ ਖਾਈਏ?, ਵਿਆਕਰਨ)

(i) ਸ਼ਬਦ ਅਰਥ:- (2m)

(ੳ) ਜ਼ਿੰਦਗੀ

(ਅ) ਸੰਗ

(ii). ਵਾਕ ਬਣਾਓ:- ਸਕੂਲ (1M)

(iii) ਖਾਲੀ ਥਾਵਾਂ ਭਰੋ:- (3M)

। (ੳ) ਵਿਆਕਰਨ ਭਾਸ਼ਾ ਨੂੰ ----- ਕਰਦੀ ਹੈ।

(ਅ) ਸਾਨੂੰ ਵਿੱਦਿਆ ਦਾ ਸੱਚਾ ਪ੍ਰਸਾਦ----- ਤੋਂ ਮਿਲਦਾ ਹੈ।

(ੲ) ਕਵੀ ਸਕੂਲ ਵਿੱਚ \_\_\_\_\_ ਸਿੱਖਣ ਲਈ ਕਹਿ ਰਿਹਾ ਹੈ।

(iv) ਪ੍ਰਸ਼ਨ/ਉੱਤਰ (4M)

(ੳ) ਵਿਆਕਰਨ ਕਿਸ ਨੂੰ ਆਖਦੇ ਹਨ ?

(ਅ) ਜੇ ਵਿਆਕਰਨ ਨਾ ਹੁੰਦੀ ਤਾਂ ਕੀ ਹੁੰਦਾ ?

(ੲ) ਸਾਨੂੰ ਕਿਹਨਾਂ ਦੀ ਗੱਲ ਦੇ ਅਦੂਲ ਨਹੀਂ ਚੱਲਣਾ ਚਾਹੀਦਾ ਹੈ ?

(ਸ) ' ਚੱਲ ਵੀਰਾ ਪੜ੍ਹਨ ਸਕੂਲ ਚੱਲੀਏ ' ਕਵਿਤਾ ਵਿੱਚ ਗੁਰੂ- ਉਸਤਾਦ ਸ਼ਬਦ ਦਾ ਪ੍ਰਯੋਗ ਕਿਹਨਾਂ ਲਈ ਕੀਤਾ ਗਿਆ ਹੈ ?

2. ਤੁਹਾਨੂੰ ਸਿਹਤਮੰਦ ਰਹਿਣ ਲਈ ਕਿਹੜੀਆਂ ਚੀਜ਼ਾਂ ਖਾਣੀਆਂ ਚਾਹੀਦੀਆਂ ਹਨ ਅਤੇ ਕਿਹੜੀਆਂ ਚੀਜ਼ਾਂ ਨਹੀਂ ਖਾਣੀਆਂ ਚਾਹੀਦੀਆਂ? ਉਹਨਾਂ ਨਾਲ ਸੰਬੰਧਤ ਕੁੱਝ ਤਸਵੀਰਾਂ ਵੀ ਲਗਾਓ। (ਕੀ ਖਾਈਏ ਕੀ ਨਾ ਖਾਈਏ ?

-A4 Sheet)

(5m)

3. ਦ੍ਰਿਸ਼ ਵਰਨਣ (5m)

(i) ਉੜੀਸਾ

(ii) ਪੰਜਾਬ



ਨੋਟ:-1. ਸਾਰਾ ਕੰਮ ਵੱਖਰੇ ਪੇਪਰਾਂ(Loose sheets) ਉੱਤੇ ਕਰਕੇ ਫਾਈਲ ਵਿੱਚ ਰੱਖੋ।

2. ਜਮਾਤ ਵਿੱਚ ਕੀਤੇ ਗਏ ਕੰਮ ਦੀ ਦੁਹਰਾਈ ਕਰੋ।

## MATHS

General Instructions:

- Submit your work on loose sheets in a file/folder with a cover page.
- Present your work neatly and as creatively as possible.

1) Which has more sides: Rectangle or Triangle?

2) Name two polygons.

3) How many sides does a quadrilateral have?

4) Solve.

a)  $XIV + VII$

b)  $XXXIX + XI$

5) There are 5987 trees in a forest. 1049 trees got burnt in a forest fire and 364 were cut by people. How many trees were left in the forest?

6) Add the following.

$$56234 + 24668$$

7) Subtract and Check your answer.

$$85720 - 1008$$

8) Put commas in the following numbers according to Indian Place Value System.

a) 59566

b) 6050003

7) Round off 45,657 to the nearest thousands .

8) Round off the greatest 4-digit number to the nearest tens.

9) Add by expanding the numbers.

$$28 + 19$$

10) Identify and extend the pattern.

a) 15, 30, 45, \_\_\_\_\_, \_\_\_\_\_

b) 1, 3, 7, 9, 13, \_\_\_\_\_, \_\_\_\_\_.

11) Fill in the blanks.

a)  $40,361 - \underline{\hspace{2cm}} = 30,361$

b)  $10,000 + 100 = \underline{\hspace{2cm}}$

12) Circle the larger number.

11,018    11,840    11,800

13) Write in words.

309909

14) Write the numbers in ascending order.

23,456    72,341    1,29,300    4,17,204

15) Write the expanded form of the given number.

1,23,456

16) Subtract

10000 — 2345

17) Write the Roman numerals for the given Hindu- Arabic numbers.

a) 190

b) 123

18) The largest 6- digit number is\_\_\_\_\_.

19) Make the smallest and the greatest 5- digit number without repeating the digits.

3,6,5,0,4

20) The predecessor of the smallest 6- digit number\_\_\_\_\_.

### AIL Activity

- **Make flash cards on (any five) rivers of Punjab and Odhisa . Write their length and place of origin .**



# SCIENCE

## States of Matter "Solid, Liquid, and Gas"

Directions: Read each statement and choose the correct answer.

1. Which state of matter has a fixed shape? \_ \_ \_ \_ \_
2. Which state of matter takes up the shape of its container? \_  
\_ \_ \_ \_ \_
3. Which state of the matter is easy to compress? \_ \_ \_ \_ \_
4. State of matter that is not easy to compress. \_ \_ \_ \_ \_
5. State of matter that does not flow easily? \_ \_ \_ \_ \_
6. Matter that can easily flow. \_ \_ \_ \_ \_
7. Mostly, this state of matter is transparent. \_ \_ \_ \_ \_
8. We can smell or feel this state of matter, but usually it is invisible to the naked eye. \_ \_ \_ \_ \_
9. The words sticky, smooth, wet, and gooey are key words for \_  
\_ \_ \_ \_ \_
10. Everything we see around us is what we called \_ \_ \_ \_ \_



Answer true or false:

1. Solids can change their shape.


2. Liquids take the shape of the container.

3. Liquids keep their shape.

4. Gases do not have a fixed shape.

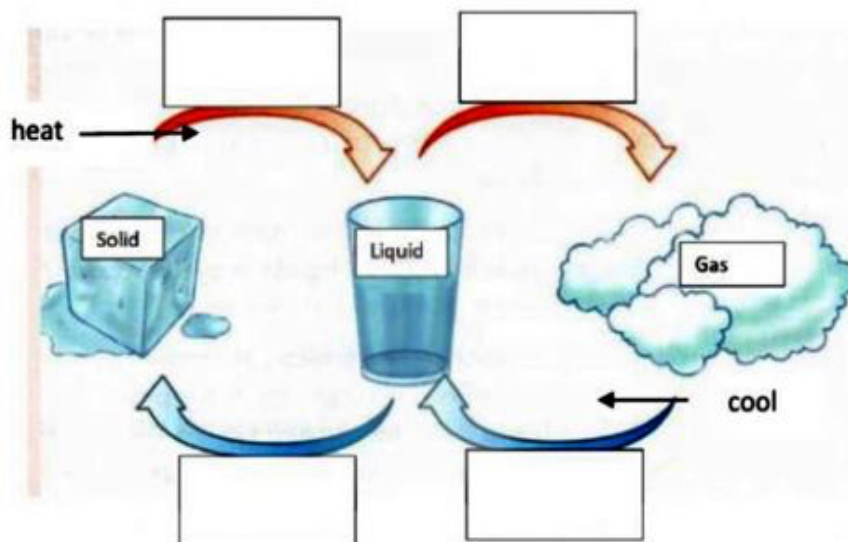
5. Gases are often invisible.

Look at the items below and decide if they are solid, liquid or gas.



Drag and drop the names of the changes of matter:

Evaporation    melting    condensation    freezing



Complete the sentences with the correct word:

condenses

melts

evaporates

1. When you heat butter it \_\_\_\_\_.

2. When you heat water it \_\_\_\_\_.

3. When you cool gas it \_\_\_\_\_.



Label the diagram of the tooth below by dragging the correct name to the box space it matches.

**Bone**

**Blood vessels & Nerves**

**Cementum**

**Crown**

**Enamel**

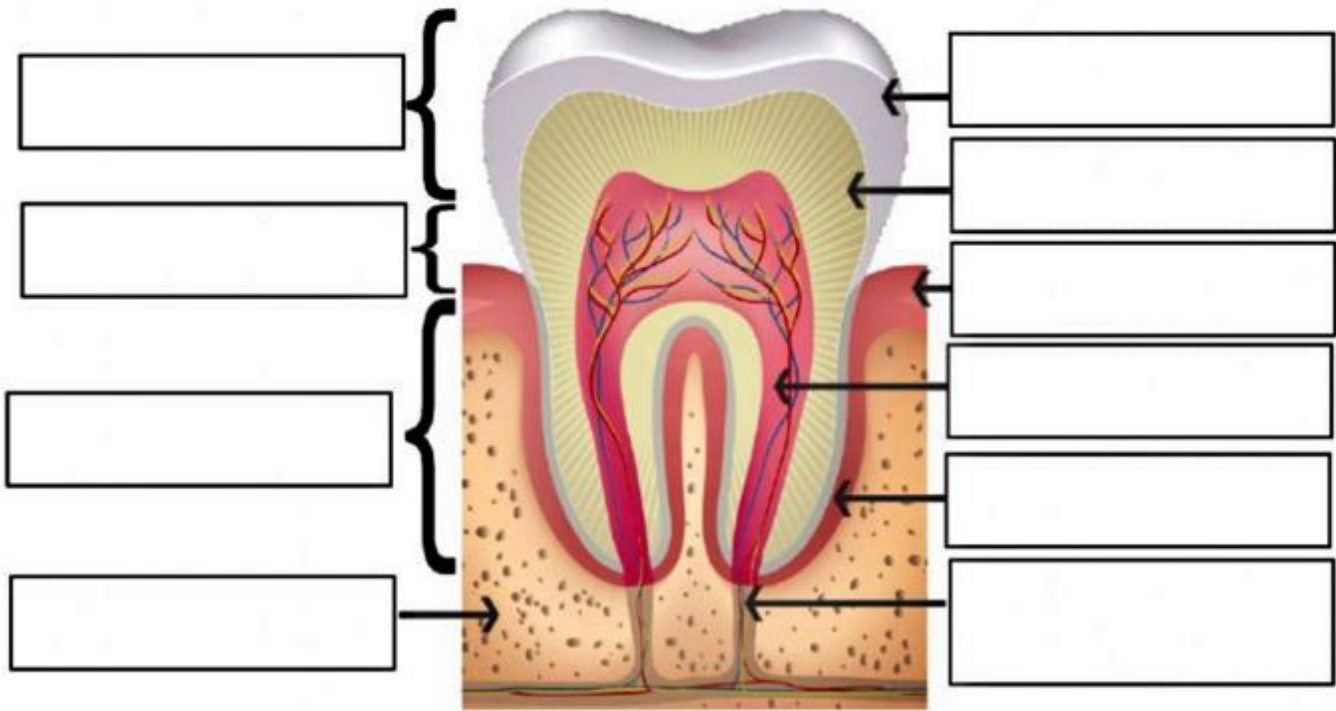
**Dentin**

**Gums**

**Neck**

**Pulp**

**Root**



Match the phrase in COLUMN A with the correct response from COLUMN B by writing the letter on the line. Responses may be used more than once.

COLUMN A

COLUMN B

- 1  This set of teeth has 20 teeth in total
- 2  Used for crushing and grinding foods
- 3  This set of teeth is also called milk teeth.
- 4  Type of tooth found at the front of the mouth
- 5  Used for ripping and tearing foods
- 6  Type of tooth found most in the permanent set
- 7  This set of teeth has 32 in total.
- 8  Used for cutting and biting into foods

- A Canine
- B Incisor
- C Molar
- D Permanent
- E Premolar
- F Primary

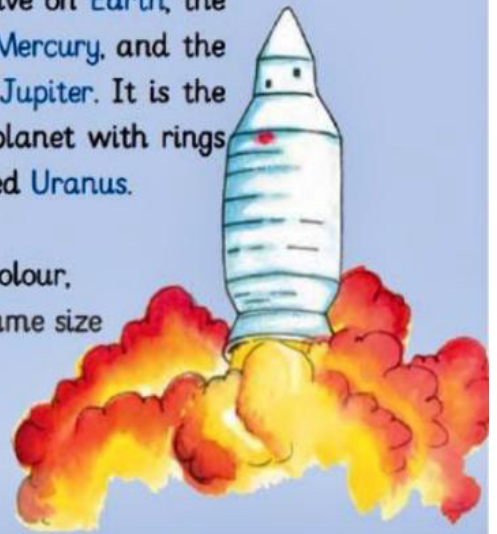


## Our Solar System

There are eight planets which go around the Sun. These eight planets and the Sun are called the Solar System.

The eight planets are different distances from the Sun. We live on **Earth**, the third planet from the Sun. The nearest planet to the Sun is **Mercury**, and the furthest planet is **Neptune**. The fifth planet from the Sun is **Jupiter**. It is the biggest planet in the Solar System. After Jupiter, there is a planet with rings called **Saturn**. The planet between Saturn and Neptune is called **Uranus**.

Our planet, Earth, is between **Venus** and **Mars**. Mars is red in colour, so it is sometimes called the 'Red Planet.' Venus is about the same size as Earth. It is the hottest planet in the Solar System.



34

How many planets are in our solar system? \_\_\_\_\_ on the earth

Which planet is called the red planet? \_\_\_\_\_ 8 planets







Where do we live? \_\_\_\_\_ Venus

What is the fifth planet from the sun? \_\_\_\_\_ Jupiter

What is the furthest planet? \_\_\_\_\_ Mars

What is the hottest planet? \_\_\_\_\_ Neptune

**# ALL Activity:-Compare by Pasting 5-5 pictures of animals found in punjab and in Odisha on A4 sheet and write adaptations shown by them.**

ADAPTATIONS SHOWN BY ANIMALS	
PUNJAB	ANDHRA PRADESH
<p><b>MONGOOSE</b> It deals with hot weather. They create burrows underground to stay cool.</p> 	<p><b>BABOON</b> They find tall trees or vertical faces for safety when they sleep.</p> 
<p><b>GARDEN LIZARD</b> It runs swiftly on the ground and even swims in water.</p> 	<p><b>HYENA</b> They have adapted amazing hearing and eyesight for seeing clearly at night.</p> 
<p><b>RAT</b> They find warm places in cold weather to protect themselves.</p> 	<p><b>BISON</b> They develop thick, woolly coats that protect them from freezing temperatures and harsh winds.</p> 

Name: Samruddhi Singh  
Date: 11/12/20

Sample >

# SOCIAL SCIENCE

**l) Mark the following on the outline political map of India:-**

- a) Neighboring countries:- Pakistan , Bangladesh , Nepal, China,Sri lanka
- b) Water bodies and Islands :- Arabian Sea, Indian Ocean, Andaman and Nicobar Islands
- c) States: - Odisha, Punjab





## II) Answer the following

help box :-

Alluvial, Shiwalik, Terrace , Airways , Himalayas ,India , 1853, Mango ,  
Nepal ,soil, Arabian Sea, Desert,Glacier ,Himalayas,Rajasthan

1. \_\_\_\_\_ is the uppermost layer of the earth.
2. The first train in India ran between Mumbai to Thane in \_\_\_\_\_.
3. The Southernmost range of Himalayas is called \_\_\_\_\_.
4. \_\_\_\_\_ soil is very sandy and coarse.
5. The king of fruit is \_\_\_\_\_.
6. \_\_\_\_\_ Farming is done on hill slopes of shivaliks.
7. \_\_\_\_\_ are the fastest and costliest means of transport.
8. Mount Everest is located in \_\_\_\_\_ country.
9. The soil formed because of deposition of silt by rivers is called \_\_\_\_\_.
10. \_\_\_\_\_ means Abode of Snow.
11. The most populated country in the world is \_\_\_\_\_.
12. Slow moving river of ice is called \_\_\_\_\_.
13. The \_\_\_\_\_ are the highest and longest mountain range of the world.
14. \_\_\_\_\_ is the largest state of India.
15. The sea touching the west coast of India is \_\_\_\_\_.

## III) Art Integrated Activity (AIL):-

Make a list of monuments of Odisha and Punjab with pictures on A3 sheet.


**Revise Chapter 7,8 done in class.**



# COMPUTER

- I. Find and circle the words given in the grid. Refer the box for clue.

WORDART, MERGE, TABLE, SPLIT, CELLS, TEXT



- II. Draw and colour different shapes available in the Shapes Drop Down Menu of Shapes button of MS-Word. (Refer Page-35)



# General Knowledge

**Games are not just games: they are designed in such a way that one can develop lot of skills. Some of the values that we gain are that they are environment friendly; we get a chance to connect more with our surroundings, friends and family.**


Let's have a look on various games and identify their name




\_\_\_\_\_




\_\_\_\_\_



\_\_\_\_\_



\_\_\_\_\_



\_\_\_\_\_





# Art & Craft

Make any beautiful handmade flowers bunches  
one example is there

