



# Sanskriti KMV SCHOOL

Session-2023-24

Summer Break Assignments


Grade-II

**“School is off as summer’s in,  
Let the boredom stop and the FUN begin”**

**Dear Parents,**

Vacation is a welcome break! It is a golden period for family reunion and utilizing it in the most fruitful manner. So staying inside, beating the scorching heat of summers and to avoid being monotonous few fulfilled activity based tasks have been designed for the students so that they can spend their relaxation time in the most constructive way. But before advancing towards it, few points need to be taken into consideration:

- Summer Break: -28<sup>th</sup>, May, 2023 to 2<sup>nd</sup>, July 2023. School will reopen on 3<sup>rd</sup>, July 2023.
- Students should complete their Holidays Homework and submit it positively post vacation. It should be handed over to the Grade-Incharge in a single clear folder labelled properly with student’s name, father’s name, class and section

- 
- Prioritize their physical fitness. Follow regular Fitness Regime and maintain a balanced diet.
  - Involve children in household chores
  - Encourage your child to adopt any one bird during the vacation. Take proper care by feeding it at regular intervals.
  - Spend quality time with the grandparents and reduce the screen time
  - Keep a record of places visited, special days enjoyed, with the photograph in a scrap book.

Looking forward for a delightful fun filled  
time ahead!

**HAPPY HOLIDAYS!**

**PRINCIPAL**



# ENGLISH

## Mindblowing Facts!

1. Soil is full of life.
2. It snows in Sahara Desert.
3. There is enough gold inside Earth to coat the planet.
4. Human beings can use only a small fraction of Earth's water.
5. Lemons float but limes sink.
6. No number before 1000 contains the letter 'A.'
7. Bees can fly higher than Mount Everest.
8. Bees can make coloured honey.
9. Climate change is causing flowers to change colour.
10. Active bacteria found in curd helps in digestion.

**Note:** Talk about the above facts with your parents.



# KNOW YOURSELF

1. My childhood nickname is \_\_\_\_\_.
2. My biggest role model is \_\_\_\_\_.
3. My hobby I could never give up is \_\_\_\_\_.
4. I am good at \_\_\_\_\_.
5. My favourite comfort food is \_\_\_\_\_.
6. If I could have any superpower, it would be \_\_\_\_\_.
7. The person in my family with whom I share a good bonding is \_\_\_\_\_.
8. In an emergency, the first call I will make to \_\_\_\_\_.

# ENGLISH

Read the given passage and answer the following questions.

Meena and Reena are friends. They are seven years old. They first met each other in a park. Meena has brown hair and black eyes. Reena has black hair and brown eyes. They both like to play with dolls and ride on swings. Meena likes to eat ice-creams and Reena likes to eat cupcakes. They both like to read storybooks and English is their favourite subject.



i) Who is Meena's friend ?

---

ii) Where did they meet first?

---

● Fill in the blanks:-

iii) They both like to play with dolls and ride on \_\_\_\_\_.

● Write true / false :-

iv) Maths is their favourite subject \_\_\_\_\_.

● Write the opposite of:-

v) Enemies- \_\_\_\_\_.

Look at the picture and frame five sentences with the help of the words given in the bracket.



( beach , sun , kite , ball , crab , sandcastle , bucket )

1. \_\_\_\_\_
2. \_\_\_\_\_
3. \_\_\_\_\_
4. \_\_\_\_\_
5. \_\_\_\_\_



Write 'U' if the noun is uncountable and 'C' if it is countable.

cake

sugar

salt

hair

fingers

legs

water

pen

pencil

box





Fill in the blanks with suitable adjectives.

1. The \_\_\_\_\_ lion chased the deer.
2. Sita is a \_\_\_\_\_ girl.
3. The elephant is a \_\_\_\_\_ animal.
4. The \_\_\_\_\_ car is mine.
5. The flowers are \_\_\_\_\_.
6. The drawing is \_\_\_\_\_.
7. She has \_\_\_\_\_ hair.
8. The \_\_\_\_\_ book is making me sleepy.
9. The \_\_\_\_\_ house is ours.
10. The \_\_\_\_\_ students went to school.

**# Do page- 37,38,39 in English Companion Book.**


**ALL Activity: - Paste 5 - 5 pictures of Historical Buildings of Punjab and Odisha along with their names on an A4 sheet.**







Ques 6. Reading Campaign Activity.



**15 DAYS OF READING CAMPAIGN**

**Note:** The information regarding the above activity will be floated in Class WhatsApp group.




# HINDI

1. प्रतिदिन सुलेख रचना पर एक पेज लिखें ।
2. पाठ 2,3,5 को रोज पढ़ें ।
3. कक्षा में कराए गए कार्य की दोहराई करें ।
4. दिए गए चित्रों में रंग भरें ।




ओडिसी नृत्य





पंजाब का गिद्दा



# PUNJABI

1. ਮੇਰਾ ਪਰਿਵਾਰ ਪੰਨਾ ਨੰਬਰ- 8 (On A4sheet )
2. ਮੁਕਤਾ ,ਕੰਨਾ ਅਤੇ ਸਿਹਾਰੀ ਨਾਲ ਸੰਬੰਧਿਤ ਪੰਜ-ਪੰਜ ਸ਼ਬਦ ਲਿਖੋ।(ਕੰਮ ਪੰਜਾਬੀ ਦੀ ਕਾਪੀ ਉੱਤੇ ਲਿਖੋ)
3. ਪੰਜਾਬੀ ਵਰਨਮਾਲਾ ਗੀਤ ਯਾਦ ਕਰੋ (ਪੰਨਾ ਨੰਬਰ:- 13 - 15)
4. ਪੰਜਾਬ ਅਤੇ ਉੜੀਸਾ ਵਿੱਚ ਖੇਡੀਆਂ ਜਾਣ ਵਾਲੀਆਂ ਖੇਡਾਂ ਦੇ ਨਾਮ ਲਿਖ ਕੇ ਕਿਸੇ ਦੇ ਖੇਡਾਂ ਦੇ ਚਿੱਤਰ ਚਿਪਕਾਓ।

# MATHS

1.

Circle the shape which best matches the real life object in the picture.

		
Cone / Cube / Cylinder	Cone / Sphere / Cylinder	Cylinder / Cone / Cube
		
Cone / Cube / Cylinder	Sphere / Cube / Cylinder	Cone / Sphere / Cylinder
		
Cone / Sphere / Cylinder	Cone / Cube / Cylinder	Sphere / Cone / Cube



2.



Give the expanded form of the following numbers :-

a)  $168 = \underline{100} + \underline{60} + \underline{8}$

b)  $120 = \underline{\quad} + \underline{\quad} + \underline{\quad}$

c)  $109 = \underline{\quad} + \underline{\quad} + \underline{\quad}$


Give the place value of the underlined number:-

a)  $\underline{8}9 = \underline{\quad}$

c)  $15\underline{7} = \underline{\quad}$


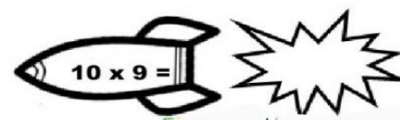
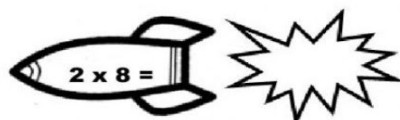
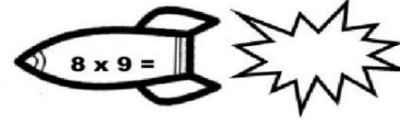
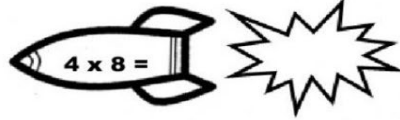
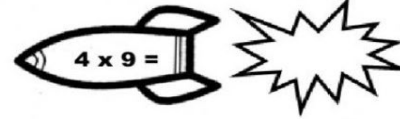
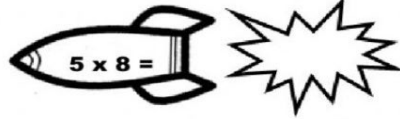
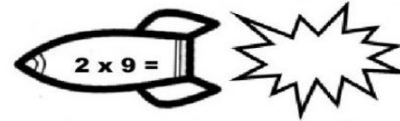
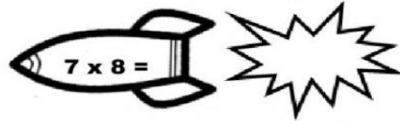
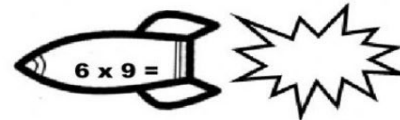
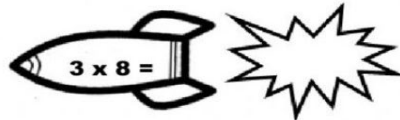
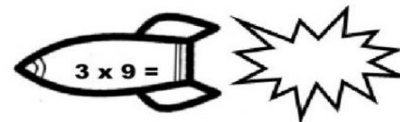
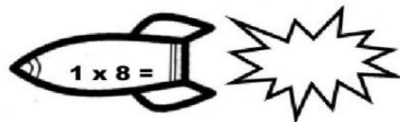
b)  $\underline{2}00 = \underline{\quad}$

d)  $10\underline{6} = \underline{\quad}$



3.





FILL IN THE BLANKS





4.

Colour the clown :- Circle - red, square - yellow,  
rectangle - blue , triangle - green



5. All India State ----- Odisha

ODISHA



1



Dahi Pakhala

2



Kanika

3



Rasabali

4




Chungdi Malai

5



Chhenapoda Pitha

6



Dalma

Colour the state Odisha and count the letters in the given names of famous food items of Odisha and write their number names in the space given below :-

1.-----

2.-----

3.-----

4.-----

5.-----

6.-----

6. Learn tables 1 to 10







# EVS



1) Fill in the blanks by choosing the correct option from the box:


neighbours   Diwali   nuclear   outdoors   neighbourhood



1) When parents and children live together, it is called a \_\_\_\_\_.


2) A particular area where many families live is called a \_\_\_\_\_.

3) When people live in the same building complex or street, they are called \_\_\_\_\_.



4) You can play board games with your friends and neighbours indoors or \_\_\_\_\_.

5) \_\_\_\_\_ is the festival of lights, celebrated with firecrackers, lights and sweets.





## II) Write True or False:-

- 1) When guests come in the evening, you help your parents in the preparations(    )
- 2) We can help older people in the family by running errands for them. (    )
- 3) People who live next to each other are called extended family.(    )
- 4) It is not good to welcome new neighbours as they are strangers to you.(    )
- 5) When you celebrate festivals with your neighbours, you care, share, and have fun with them.(    )



III) Find the following words in the grid:

Christmas


Diwali

Ramzan

Holi

Pongal

C	L	I	O	I	A	L
H	N	Q	L	P	B	A
R	I	A	D	O	B	G
I	M	V	Z	L	H	N
S	F	M	Q	M	G	O
T	Z	N	D	M	A	P
M	A	R	P	N	R	R
A	I	L	A	W	I	D
S	Y	Z	V	C	V	H



IV) Match the leisure activities with the picture:



restaurant



cinema



bar



party



park



café

go dancing

go out for dinner










go for a drink

go for a coffee

go see a movie

go for a picnic

V) Tick the following foods that are good for your health:


 <input data-bbox="502 696 576 813" type="checkbox"/>	 <input data-bbox="906 696 979 813" type="checkbox"/>	 <input data-bbox="1251 696 1324 813" type="checkbox"/>
 <input data-bbox="502 1200 576 1317" type="checkbox"/>	 <input data-bbox="906 1200 979 1317" type="checkbox"/>	 <input data-bbox="1251 1200 1324 1317" type="checkbox"/>
 <input data-bbox="502 1682 576 1798" type="checkbox"/>	 <input data-bbox="906 1682 979 1798" type="checkbox"/>	 <input data-bbox="1251 1682 1324 1798" type="checkbox"/>



**AIL Activity: -**



#Roll no - 1to15 - Paste pictures of 5 food items of Punjab on A4 sheet.



#Roll no 16 onwards - Paste pictures of 5 traditional clothes of Odisha on A4 sheet.



# COMPUTER

Guess who am I ?

1. I look like a television.



\_\_\_\_\_

2. I am a circular disc.



\_\_\_\_\_

3. I have a scroll wheel.







\_\_\_\_\_

4. I am also called a USB flash drive.



\_\_\_\_\_



### Answer the Following

1. Name an input device.

.....

2. Name a storage device.

.....

3. Name an output device.

.....

Identify the given images and write their names in the space provided. Also fill colors in them.



I am a .....



I am a .....

Recognise the different parts of the computer and write their names in the space provided.





## AIL Activity



Collect and fill the following information about Odisha using your electronic gadget :-

1. Name any three cities of Odisha.

(i) \_\_\_\_\_

(ii) \_\_\_\_\_

(iii) \_\_\_\_\_

2. Capital city \_\_\_\_\_

3. Famous Temple \_\_\_\_\_

4. Famous Festival \_\_\_\_\_